

Year 4 Home Learning

Autumn 2

Maths - Lesson 1




1. Complete these number tracks by filling in the missing numbers.

150	200		300	350		
-----	-----	--	-----	-----	--	--

24	28			40		48
----	----	--	--	----	--	----

16	24		40	48		
----	----	--	----	----	--	--

2. Julian makes a number using place value counters.

100s	10s	1s
		

He adds another tens counter to the grid.

Circle the number Julian has now.

554

564

455

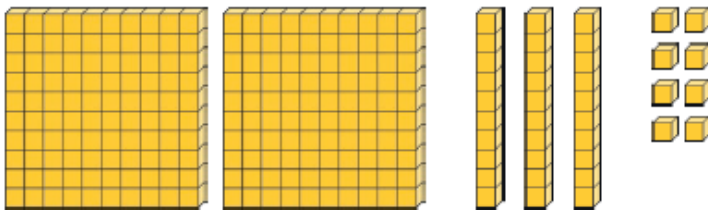
464

Lesson 2

3. Write each of these numbers in the correct column of the table.

396	750	138	841
Less Than 250	250 to 500	501 to 750	Greater Than 750

4. Write the number represented below in words.



5. Fill in the gaps.







seven hundred and thirty =

_____ = 483

six hundred and twelve =

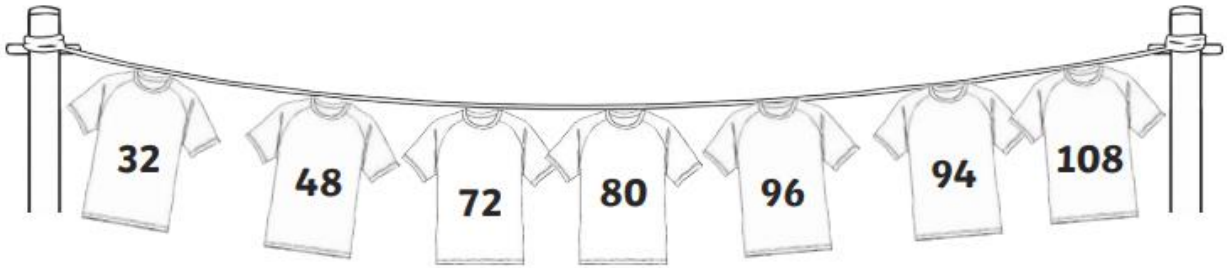
_____ = 319

Lesson 4


<p>1. How many wheels would 9 tricycles have?</p>  <p><input type="text"/></p>	<p>2. 24 people travel to an airport in taxis. 4 people travel in each taxi. How many taxis are used?</p>  <p><input type="text"/></p>	<p>3. Hanan is a keen archer. One day she shoots 5 arrows. Each arrow scores an 8. What is her total score?</p>  <p><input type="text"/></p>
<p>4. Three judges award 27 marks overall. They each give the same score. What score did they each give?</p>  <p><input type="text"/></p>	<p>5. Cinema tickets are £8. Six people go to see a film. How much will they pay altogether?</p>  <p><input type="text"/></p>	<p>6. Cans of lemonade are sold in packs of 4. Cherie wants 36 cans for a party. How many packs should she buy?</p>  <p><input type="text"/></p>

Lesson 5

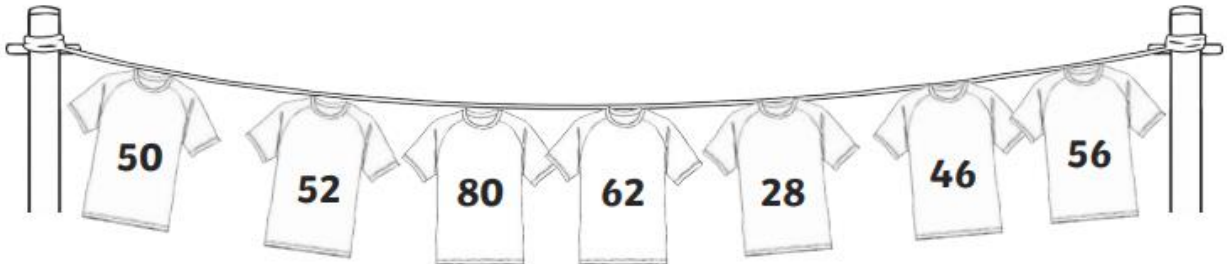
1. Colour the shirts that are not multiples of 8.



2. Colour the shirts that are not multiples of 50.



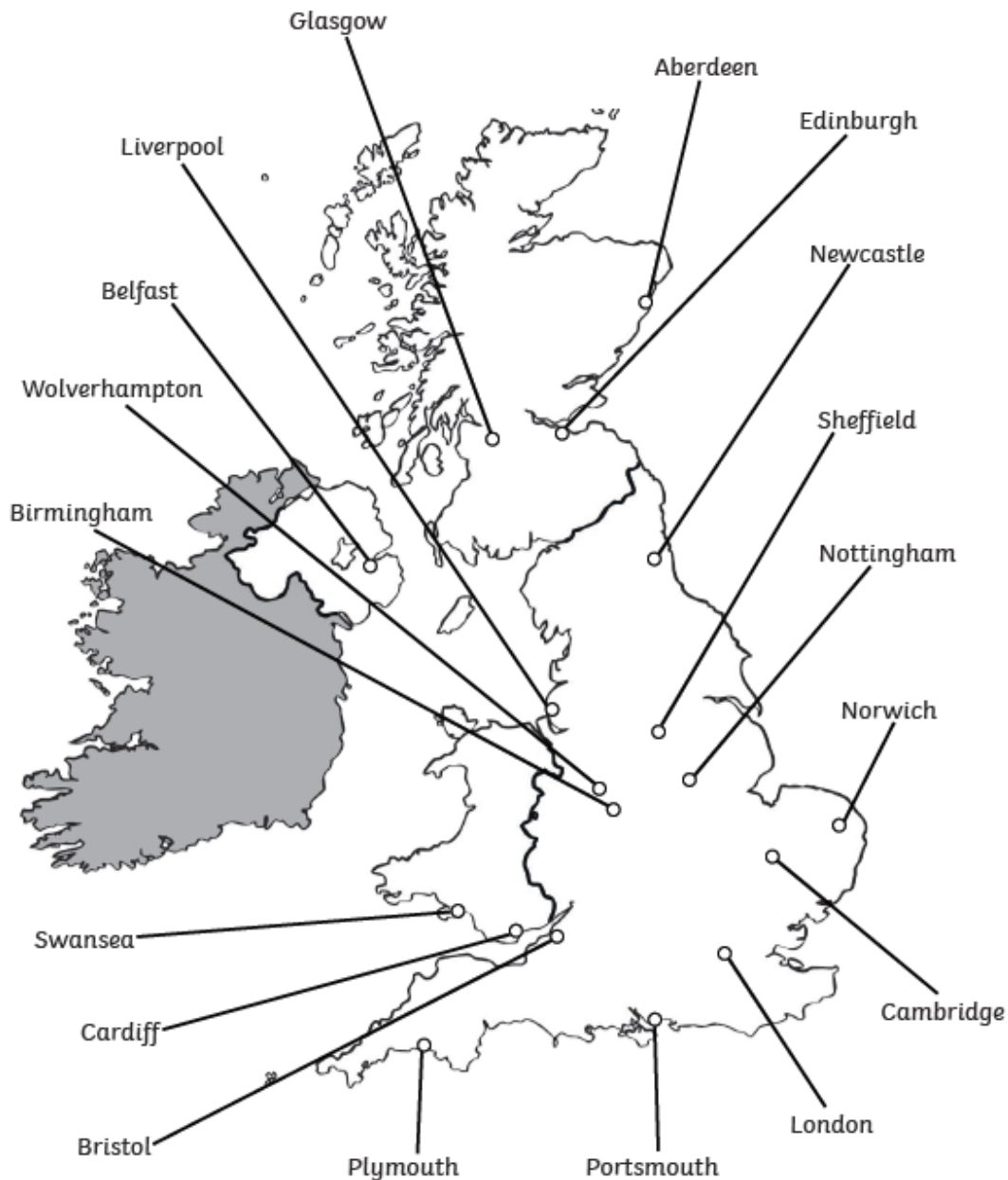
3. Colour the shirts that are not multiples of 4.



English/Topic – Lesson 1

Here is a map of the UK showing some well-known cities.

Choose one of the cities and research it. Then, answer the questions below.



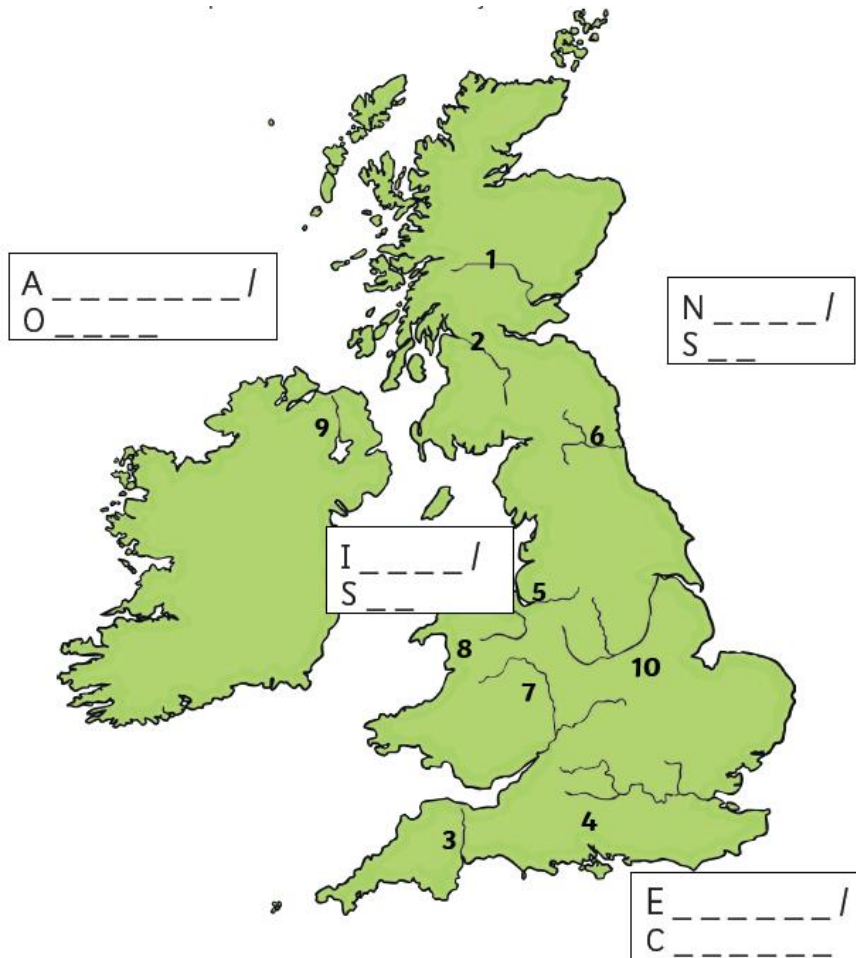
1. What is the population? _____

2. In what part of the UK is the city you chose? (e.g. North-East, South-West) _____

3. Can you find 3 interesting facts about the city you chose?

4. Can you find any famous people from the city you chose? What are they famous for?

Lesson 2



Complete the labels to show these UK seas.

Then, choose one and research it, completing the sentences below.

The sea I chose is called _____ .

It is in the _____ .

What rivers could the numbers on the map be? Use Google or BBC Bitesize to help you. Have a go at labelling them neatly yourself.

Lesson 3



Can you label and shade in County Durham on the map?

If a county borders another one, it means they are right next to each other.

Can you research which counties border County Durham?

Write an interesting fact about County Durham that you did not know before.

Lesson 4

Our capital city is London. It has changed a lot over time.

Research 3 important facts about London from each of these years:

AD 60:

1. _____
2. _____
3. _____

1666:

1. _____
2. _____
3. _____

2012:

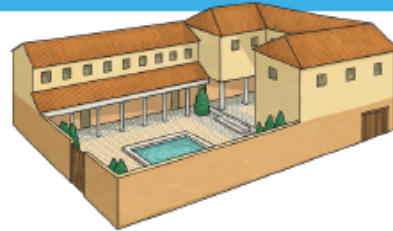
1. _____
2. _____
3. _____







Lesson 5



I am Cornelia and I am a Roman child.

I live in Colchester in a small flat over a workshop. I live with my brother, and our mother and father.



What I normally eat	Bread, vegetable soup and porridge. Sometimes we have fish if my father has caught some from the river.	
What do I do all day	I help my mother with the household jobs she has to do at home. My brother usually goes to work with our father.	
What my mother does all day	My mother works at home, preparing meals and keeping the house clean.	
What my father does all day	My father works as a builder. He works from 6am to 12 noon. In the afternoon, he and my brother go to the baths to wash and talk to their friends.	
More about my house	We don't have a kitchen, so my mother takes our bread to the baker to cook in his oven.	
Toys I like to play with	I have a wooden doll. I play board games, using pebbles as counters.	

Read this information about Cornelia, a Roman child.

What similarities and differences can you notice about your own life today?
